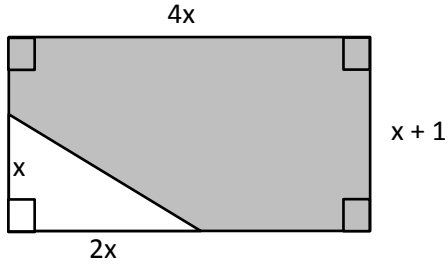


AP-3 Polynomials as Areas

Find the area of each shaded region. Be sure to show all your work and logic clearly. Diagrams are not drawn to scale.

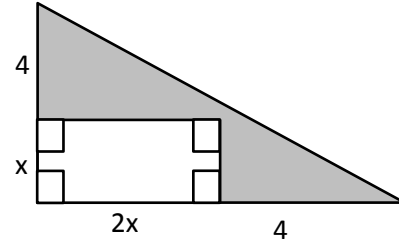
1.



Work:

Shaded Area: _____

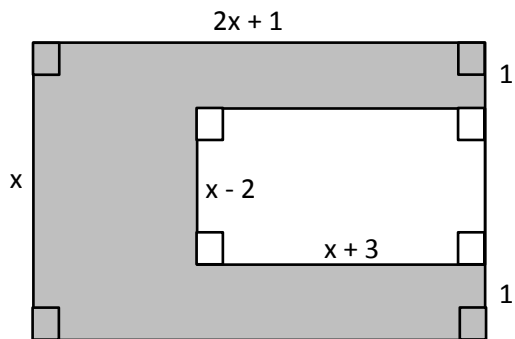
2.



Work:

Area: _____

3.



Work:

Area: _____