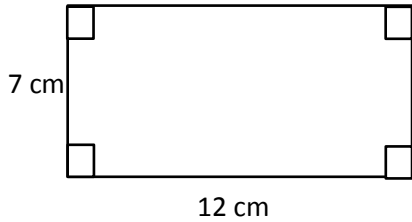


AP-1 Area & Perimeter

For each figure given, find the area (A) and/or perimeter (P) as indicated. Be sure to give the formula you are using, show the numbers plugged in to the formula (work), and give your answer with correct units. Diagrams are not drawn to scale.

1. Rectangle

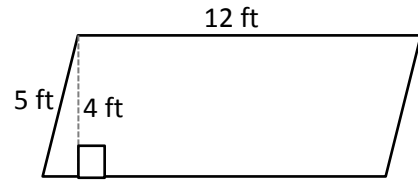


Formula:

Work:

Area: _____ Perimeter: _____

2. Parallelogram

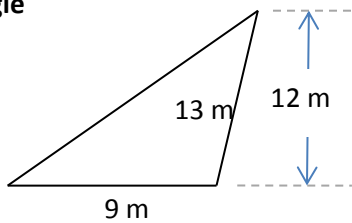


Formula:

Work:

Area: _____ Perimeter: _____

3. Triangle



Formula:

Work:

Area: _____