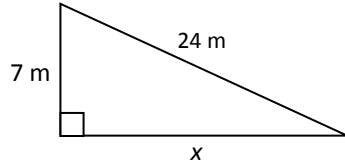


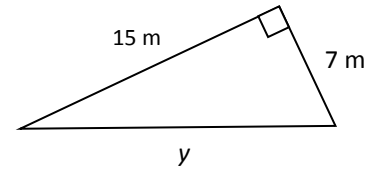
10-1 The Pythagorean Theorem

Find the missing side length in each triangle. Include units with your answer. If necessary, round to the nearest tenth.

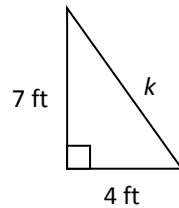
1.



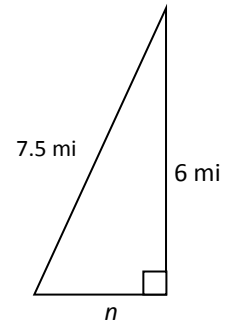
2.



3.



4.



5. Are the lengths 25, 60, and 65 the side lengths for a right triangle? Show how you know.