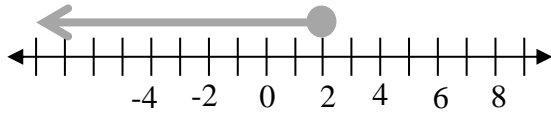
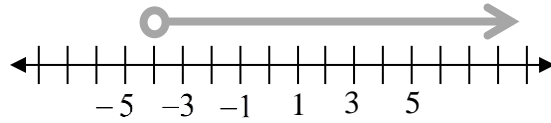


3-1 Inequalities and Their Graphs**Write the inequality represented by each graph**

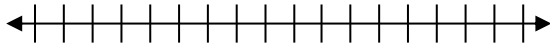
1.



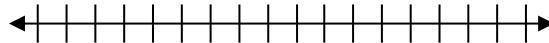
2.

**Graph each inequality.**

3. $-2 > f$



4. $n \geq -1$



5. Define a variable and write an inequality to model this situation: A person must be at most 35 years old to participate in a certain medical study.