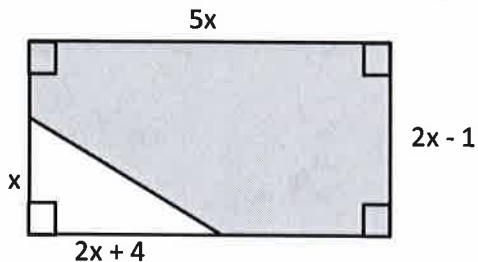


KEY

AP-3 Polynomials as Areas

Find the area of each shaded region. Be sure to show all your work and logic clearly. Diagrams are not drawn to scale.

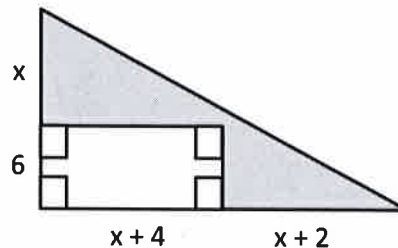
1.



Work:

Shaded Area: $9x^2 - 7x$

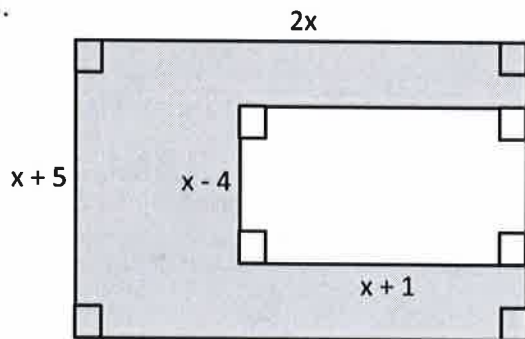
2.



Work:

Area: $x^2 + 3x - 6$

3.



Work:

Area: $x^2 + 13x + 4$